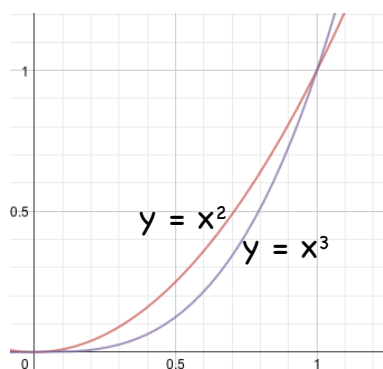


7.2 Areas in the Plane

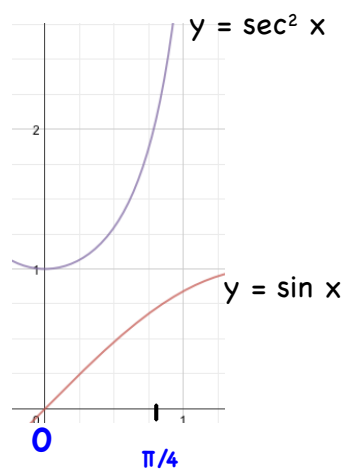
Find the area of the shaded region.



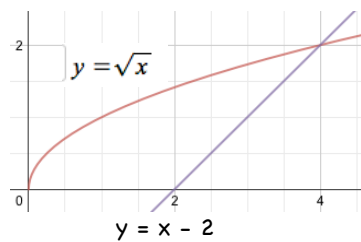
Ex 1) Find the area between the curves.



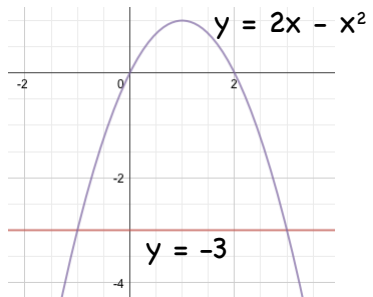
Ex 2) Find the area between the curves. $[0, \pi/4]$



Ex 3) Find the area between the curves and the x-axis.



Ex 4) Find the area enclosed by these graphs.



Ex 5) Find the area enclosed by these graphs.

